

Name _____

Identify Polygons

You can identify and name polygons by the number of sides and angles they have.



3 sides
3 angles
triangle



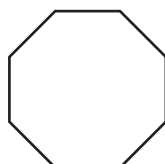
4 sides
4 angles
quadrilateral



5 sides
5 angles
pentagon



6 sides
6 angles
hexagon



8 sides
8 angles
octagon



10 sides
10 angles
decagon

Describe and name this shape.

It has **4** sides.

It has **4** angles.

It is a **quadrilateral**.

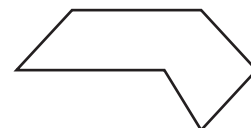


Describe and name this shape.

It has **6** sides.

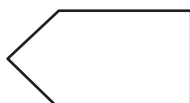
It has **6** angles.

It is a **hexagon**.



Write the number of sides and the number of angles. Then name the polygon.


1.



_____ sides

_____ angles

2.



_____ sides

_____ angles
